


Name: _____







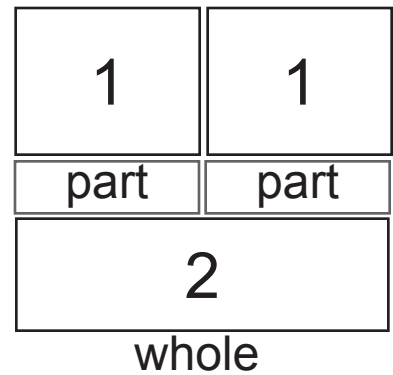

Circle two parts in each set and write numerals for whole



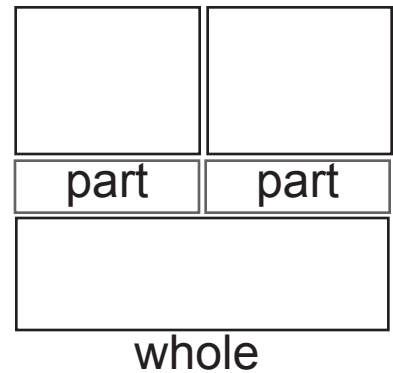


and parts. The first one is done for you.

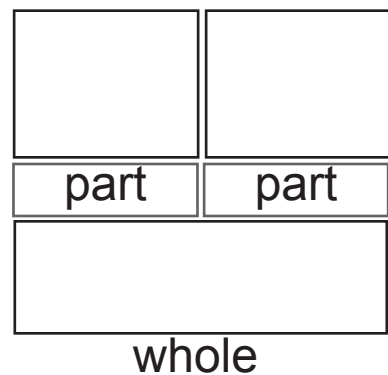

1.



2.



3.



Name: _____



Maggie's job at the pet store is to feed the



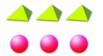
5



2



animals. She has five carrots and two rabbits.




Identify different ways Maggie could separate the set





2





of carrots for two rabbits. Draw or write amounts below.
















Name: _____

Circle or stamp your answers.



$$\begin{array}{r} 173 \\ 142 \end{array}$$



$$2 + 3 = 5$$





Write the numeral to match the total amount of dots in





each row.



1.





2.



3.



4.





Name: _____

Circle or stamp your answers.



Peggy wants to know how many dots are on her cards.



4

She sees a card with one dot and a card with four



$$2 + 3 = 5$$



dots. What is the total amount of dots?

●	○	○	○	○	○	○	○
○	○	○	○	○	○	○	○

1

●	●	●	●	●	○	○	○	○
○	○	○	○	○	○	○	○	○

5

●	●	●	●	○	○	○	○	○
○	○	○	○	○	○	○	○	○

4




Name: _____

Circle or stamp your answers.




The same color sets have equal amounts. Write amount under





each paper.




1.



2.



3.





Name: _____

Circle or stamp your answers.



3



Annelise bought three tropical fish. The clerk handed her



1



a bag with one fish. How many fish are missing?

1


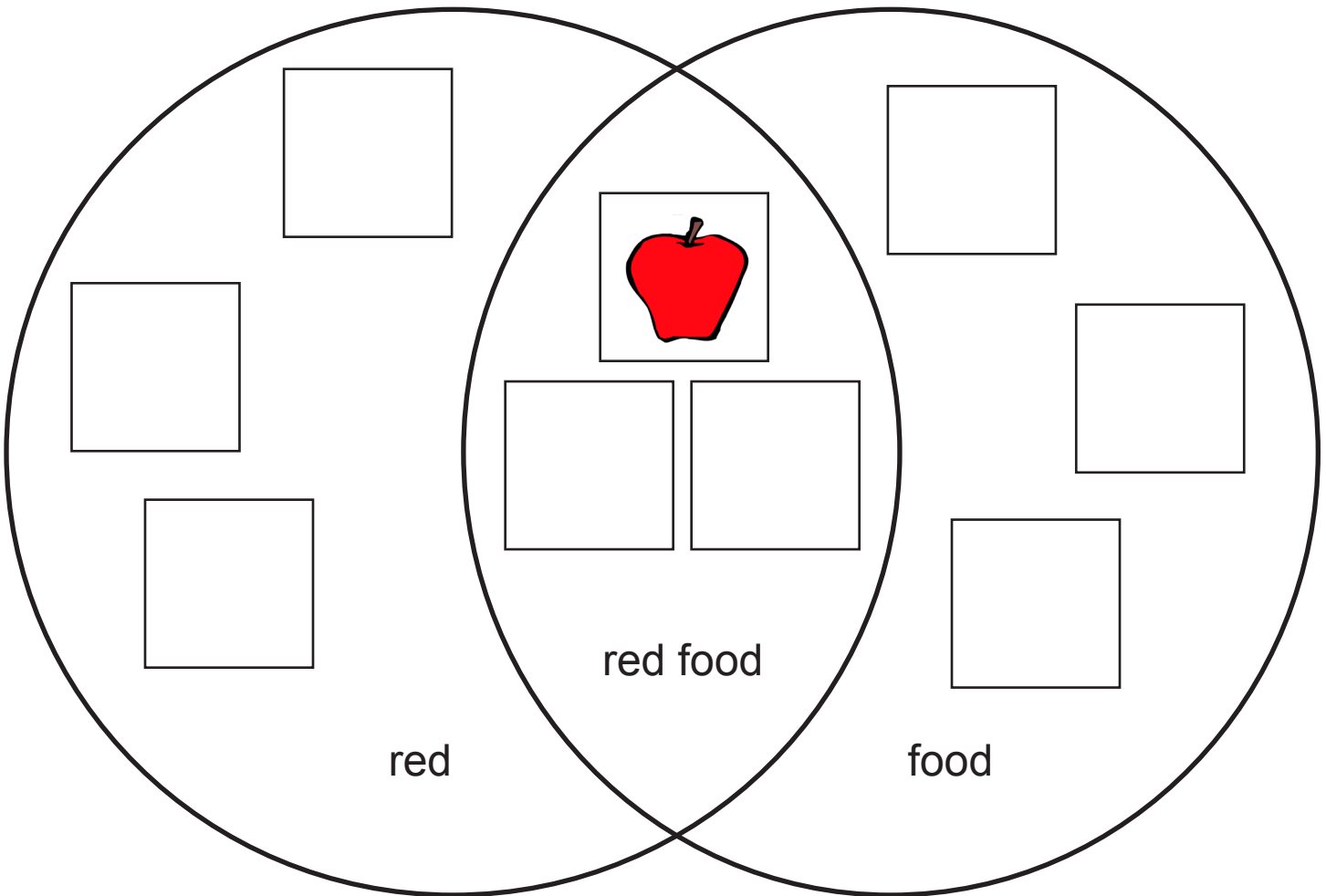
4

2

Name: _____



Cut out cards. Choose pics to sort in Venn Diagram.





Name: _____

Circle or stamp your answers.



Mickey's favorite color is red. He wanted to use red



shapes and markers to decorate his room. He sorted



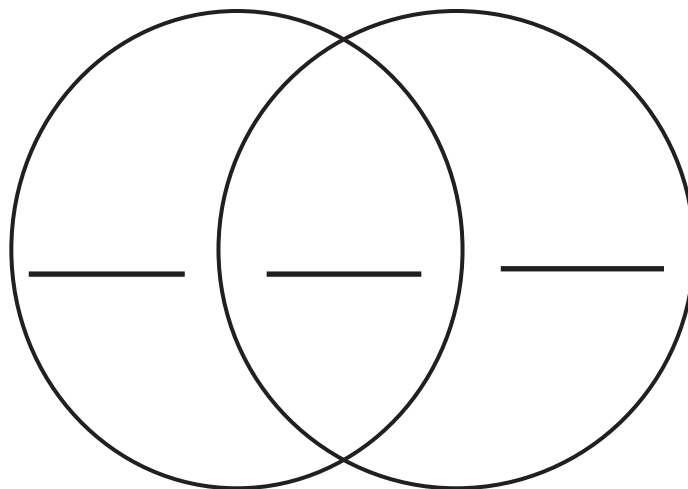
shapes in a set and his markers in a set on the



Venn diagram. Where did he sort red markers and red



shapes on the Venn diagram? Mark it with an X below.





Name: _____

Circle or stamp your answers.



Look at the sets of objects. Do not count. Estimate



and write the amount. Count and write the amount.




Estimated set: _____



Counted set: _____

1.




Estimated set: _____

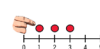


Counted set: _____

2.

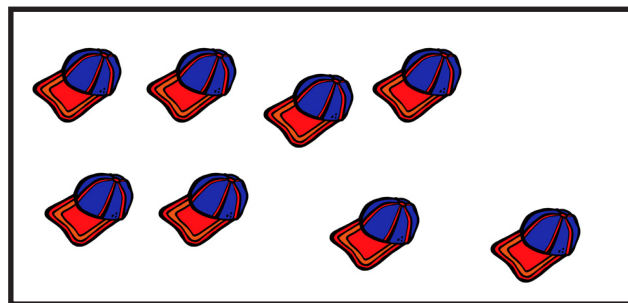


Estimated set: _____



Counted set: _____

3.





Name: _____

Circle or stamp your answers.



Koen has bowls with different kinds of cubes in them.



He wants to know if the bowls have about the same



amounts. Estimate how many cubes are in each bowl.



Bowl 1 Estimate: _____



Bowl 2 Estimate: _____



Bowl 3 Estimate: _____



Name: _____




Circle or stamp your answers.



Count the tallies, circle the number, and mark the squares



on the graph. The first tally mark has been done for you.

4			
3			
2			
1	X		
			
	swirl cookie	pink cookie	fudge cookie

swirl cookie		2	3	4
pink cookie		2	3	4
fudge cookie		2	3	4



Name: _____

Circle or stamp your answers.



Tiago looked in his cupboard for his favorite foods. He saw


1 

2 

5 

###

one donut, two pretzels, and five bananas. He tallied the



amounts. Make a graph to show the data. Look at your



$2 + 8 = 10$



graph and answer the questions.



XXXX
XXXX
XXXX
XXXX

1. How many are marked in the banana column?

1

5

3



XXXX
XXXX
XXXX
XXXX

2. How many are marked in the donut column?

1





2

4



Name: _____

Circle or stamp your answers.

4	X			
3	X		X	
2	X	X	X	X
1	X	X	X	X
	 pig	 cow	 sheep	 horse



1. Mark the set with more.

pig

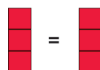
cow



2. Mark the set with less.

cow

sheep



3. Mark the set that is equal to

pig

horse



the cows.



Name: _____


Circle or stamp your answers.



Tiago looked at his graph of amounts of donuts, pretzels, and bananas in his cupboard.



Which food amount was less than pretzels?



Which food amount was more than pretzels?

